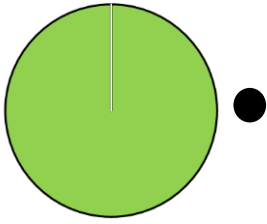


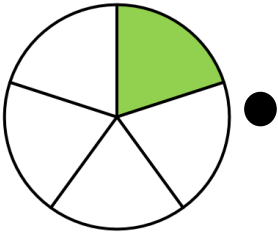
Breuken



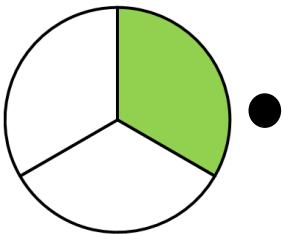
Welke cirkel hoort bij welke breuk?



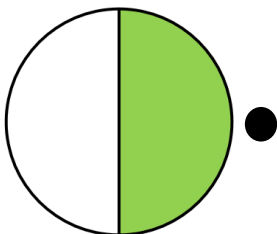
● $\frac{1}{8}$



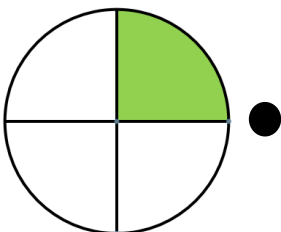
● 1



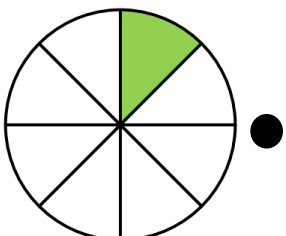
● $\frac{1}{5}$



● $\frac{1}{4}$



● $\frac{1}{2}$



● $\frac{1}{3}$